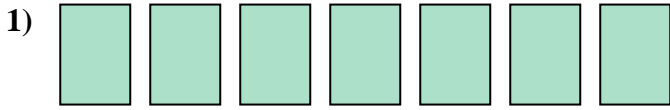


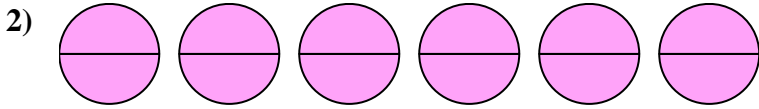


Write the shaded amount as a fraction.

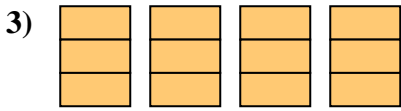
Answers



1. _____

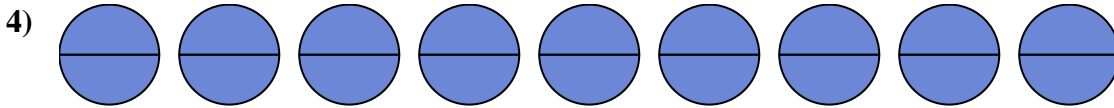


2. _____

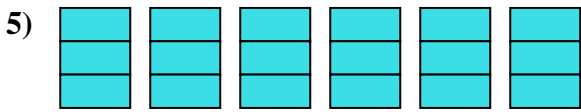


3. _____

4. _____

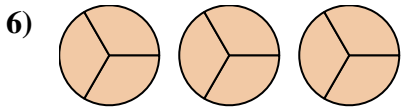


5. _____

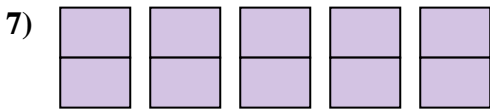


6. _____

7. _____

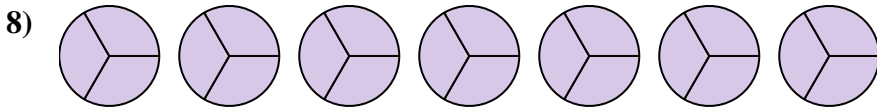


8. _____



9. _____

10. _____

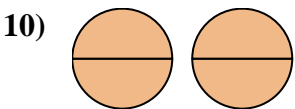


11. _____

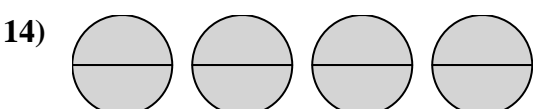

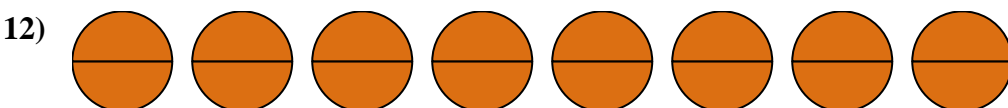
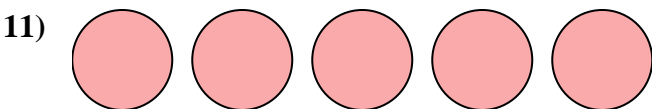


12. _____

13. _____

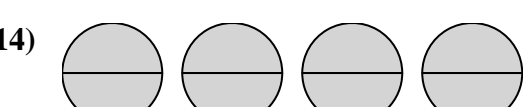
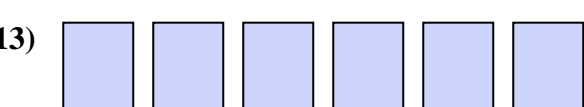
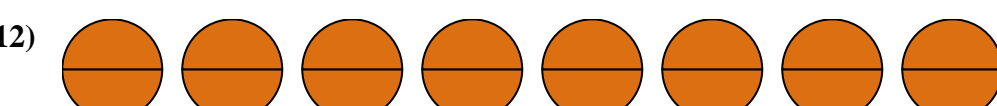
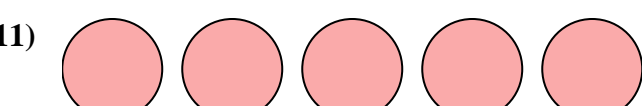
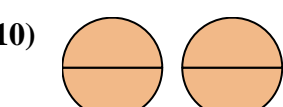
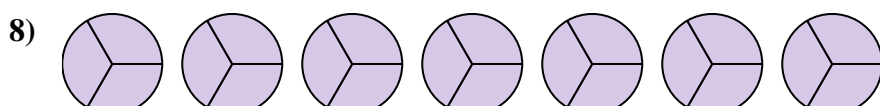
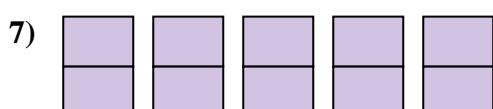
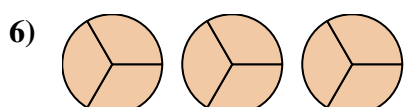
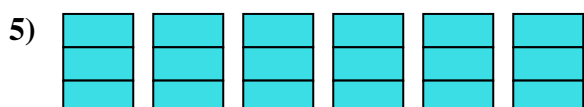
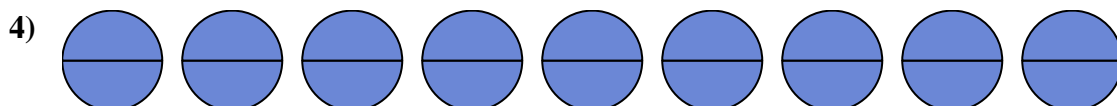
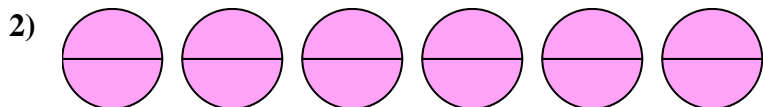


14. _____





Write the shaded amount as a fraction.



Answers

1. $\frac{7}{1}$

2. $\frac{12}{2}$

3. $\frac{12}{3}$

4. $\frac{18}{2}$

5. $\frac{18}{3}$

6. $\frac{9}{3}$

7. $\frac{10}{2}$

8. $\frac{21}{3}$

9. $\frac{4}{1}$

10. $\frac{4}{2}$

11. $\frac{5}{1}$

12. $\frac{16}{2}$

13. $\frac{6}{1}$

14. $\frac{8}{2}$